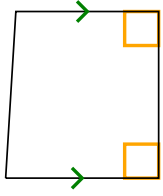




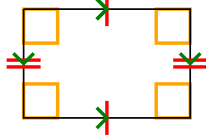
Determine if the shape shown is a Quadrilateral, Kite, Trapezoid, Parallelogram, Rhombus, Rectangle or Square (can be more than one).

Answers


1)



2)



3)



1. \_\_\_\_\_

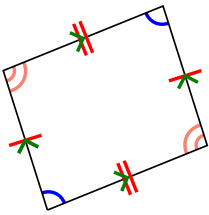
2. \_\_\_\_\_

3. \_\_\_\_\_

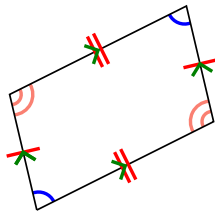
4. \_\_\_\_\_

5. \_\_\_\_\_

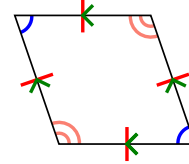
4)



5)



6)



6. \_\_\_\_\_

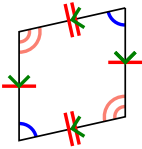
7. \_\_\_\_\_

8. \_\_\_\_\_

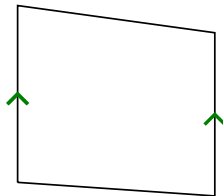
9. \_\_\_\_\_

10. \_\_\_\_\_

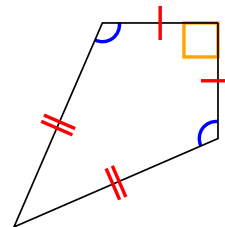
7)



8)



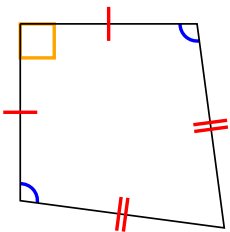
9)



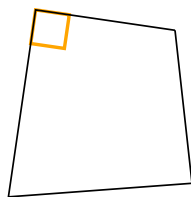
11. \_\_\_\_\_

12. \_\_\_\_\_


10)



11)

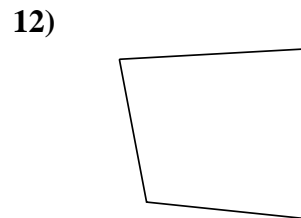
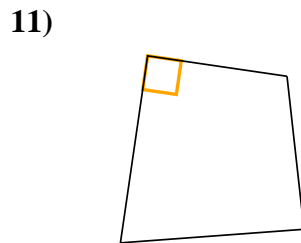
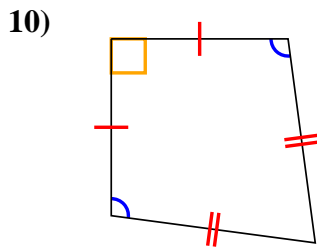
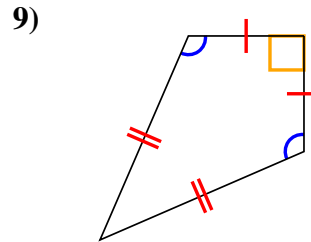
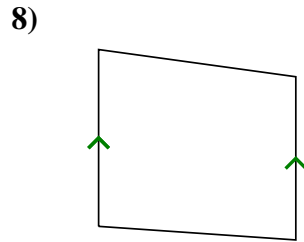
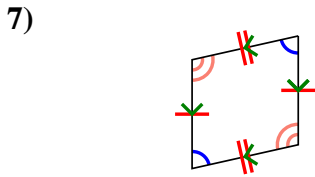
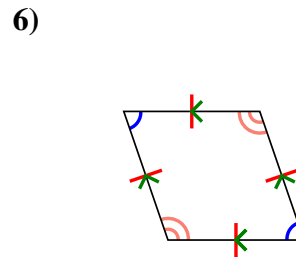
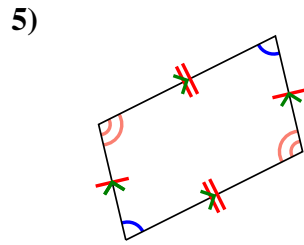
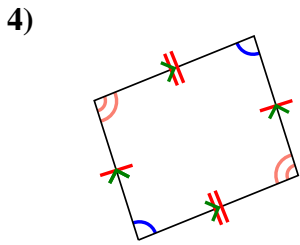
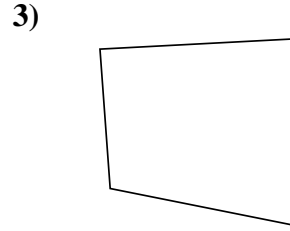
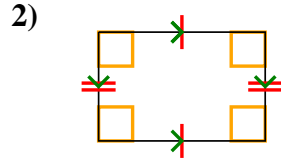
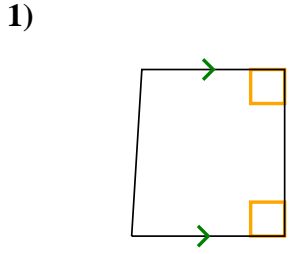


12)





Determine if the shape shown is a Quadrilateral, Kite, Trapezoid, Parallelogram, Rhombus, Rectangle or Square (can be more than one).



Answers

1. Q,T

2. Q,P,R

3. Q

4. Q,P

5. Q,P

6. Q,P,H

7. Q,P

8. Q,T

9. Q,K

10. Q,K

11. Q

12. Q